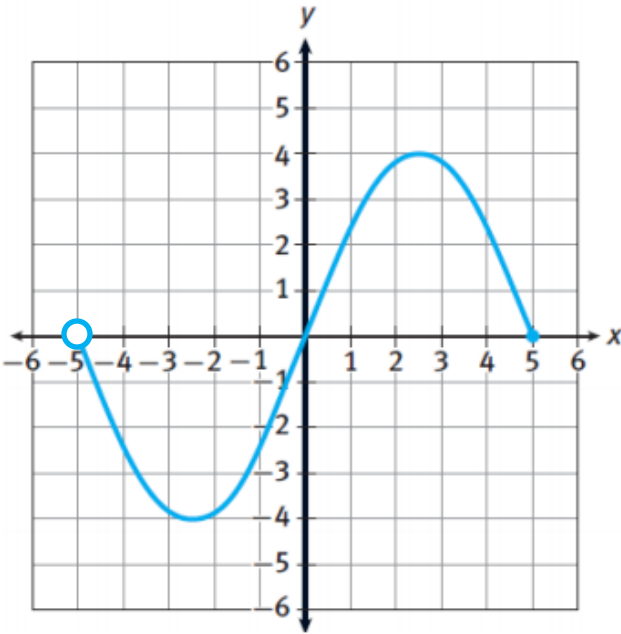


Characteristics of Graphs

Name: _____ Pd: _____



Domain: _____

Range: _____

Absolute Max: _____ Absolute Min: _____

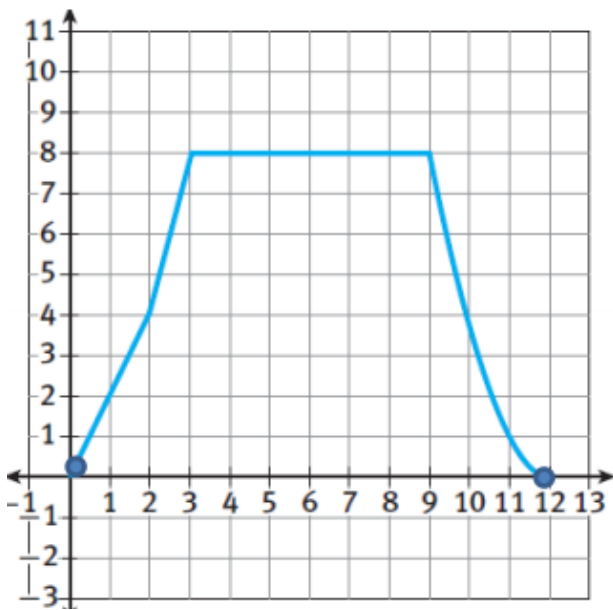
Relative Max(s): _____ Relative Min(s): _____

Discrete or continuous? _____

y-intercept(s): _____

x-intercept(s): _____

$7 \cdot f(5) =$ _____



Domain: _____

Range: _____

Absolute Max: _____ Absolute Min: _____

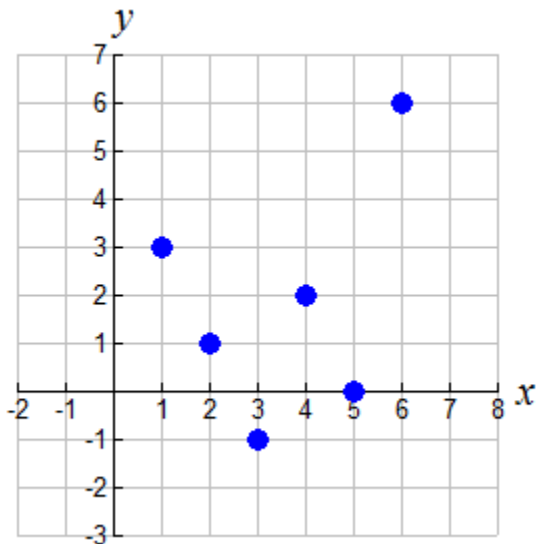
Increasing interval(s): _____

Decreasing interval(s): _____

y-intercept(s): _____

x-intercept(s): _____

$f(2) + f(9) =$ _____



Domain: _____

Range: _____

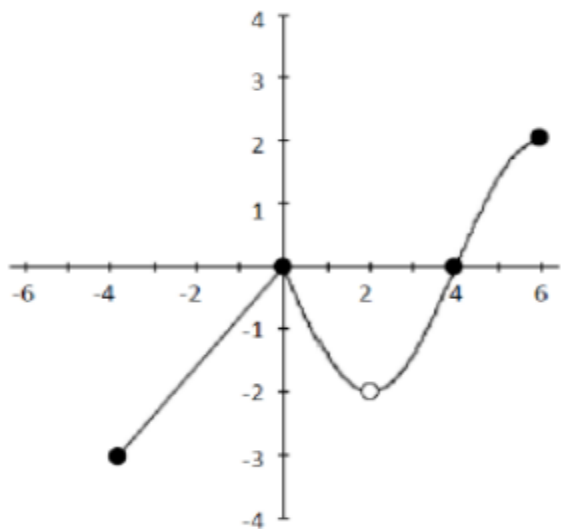
Absolute Max: _____ Absolute Min: _____

Discrete or continuous? _____

y-intercept(s): _____

x-intercept(s): _____

$3 - f(4) =$ _____



Domain: _____

Range: _____

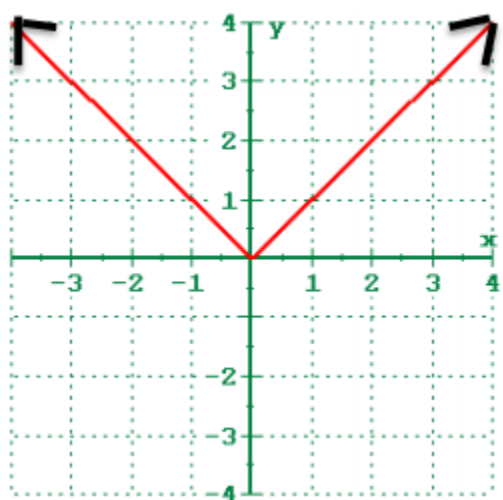
Increasing interval(s): _____

Decreasing interval(s): _____

Absolute Max: _____ Absolute Min: _____

x-intercept(s): _____

$f(-4) + f(6) =$ _____



Domain: _____

Range: _____

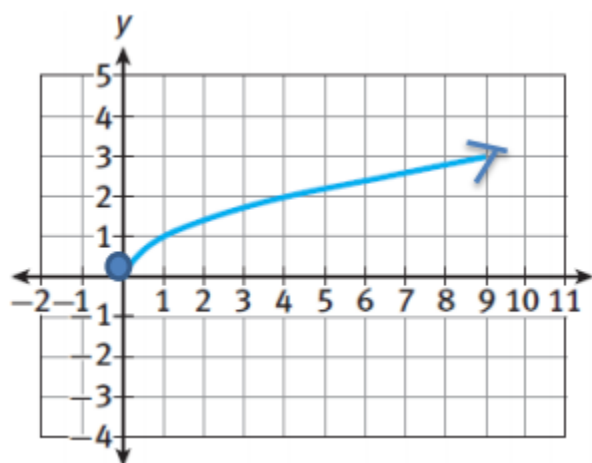
Increasing interval(s): _____

Decreasing interval(s): _____

Absolute Max: _____ Absolute Min: _____

Relative Max(s): _____ Relative Min(s): _____

End Behavior: _____



Domain: _____

Range: _____

Increasing interval(s): _____

Decreasing interval(s): _____

End Behavior: _____

$f(4) - f(1) =$ _____